

1. Work out $25 + 34$

.....

(1 mark)

2. Work out $134 - 53$

.....

(1 mark)

3. Work out 6×23

.....

(1 mark)

4. Work out $84 \div 4$

.....

(1 mark)

5. Round 428 to the nearest 10

.....

(1 mark)

6. Work out $5 - 12$

.....

(1 mark)

7. What is $\frac{1}{4}$ of 20

.....

(1 mark)

8. Find 10% of 80

.....

(1 mark)

9. Convert $\frac{1}{2}$ to a decimal

.....

(1 mark)

10. Calculate 6^2

.....

(1 mark)

11. Write down the next two numbers

3, 6, 9, 12,,

(1 mark)

12. Simplify

 $\frac{5}{10}$

.....

(1 mark)

Name : Class..... Score.....

13. Simplify $m + m + m$

.....
(1 mark)

14. Simplify $5 \times e$

.....
(1 mark)

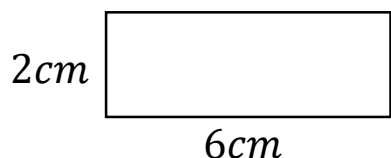
15. Expand $3(a + 2)$

.....
(2 marks)

16. Write down all the factors of 10

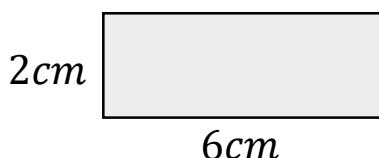
.....
(1 mark)

17. Calculate the perimeter



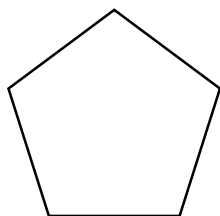
.....
(1 mark)

18. Calculate the area



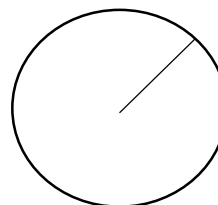
.....
(1 mark)

19. Name this shape




.....
(1 mark)

20. Name this part of a circle



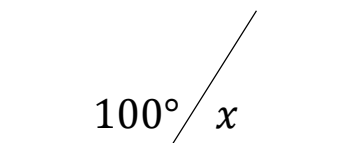
.....
(1 mark)

21. Draw all the lines of symmetry



.....
(1 mark)

22. Calculate x



$x = \dots\dots\dots$

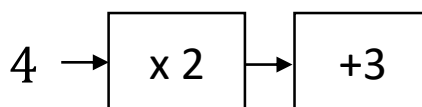
(1 mark)

23. Workout

$1 + 2 \times 3$

.....
(1 mark)

24. Solve



.....
(1 mark)